

Follow all directions. If you have a question, please ask.

Please write your contestant number/letter in the upper right hand corner of your answer sheet.


Juniors questions will appear in the **red** boxes.

Please do your own work. We do not want to take your answer sheet.

Remember, if your answer is left blank – it will definitely be incorrect!



Connecticut Junior 4-H Hippology Slides Activity





1. Identify this breed
2. What is its country of origin?
3. What is the term for the hair on its lower legs?



4. What equine relative is seen in the top picture?
5. What equine relative is seen in the bottom picture?



6. What color is this horse?



7. Identify face marking A

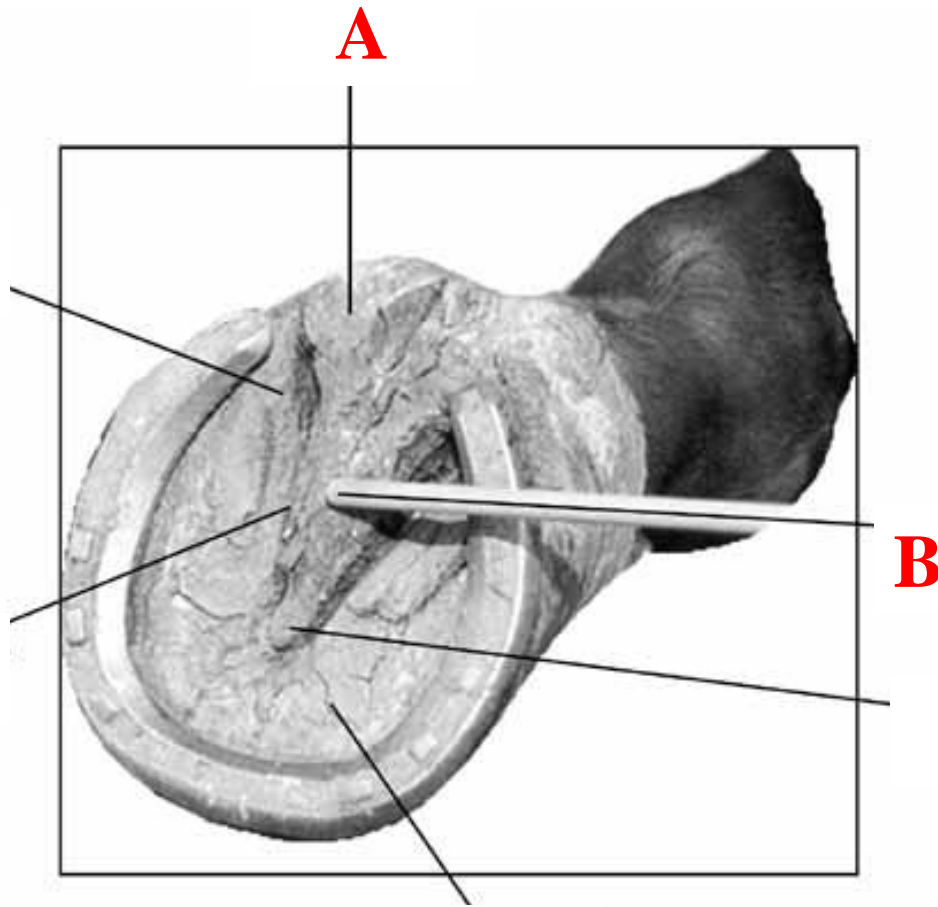
8. Identify face marking B



9. What breed is shown here?

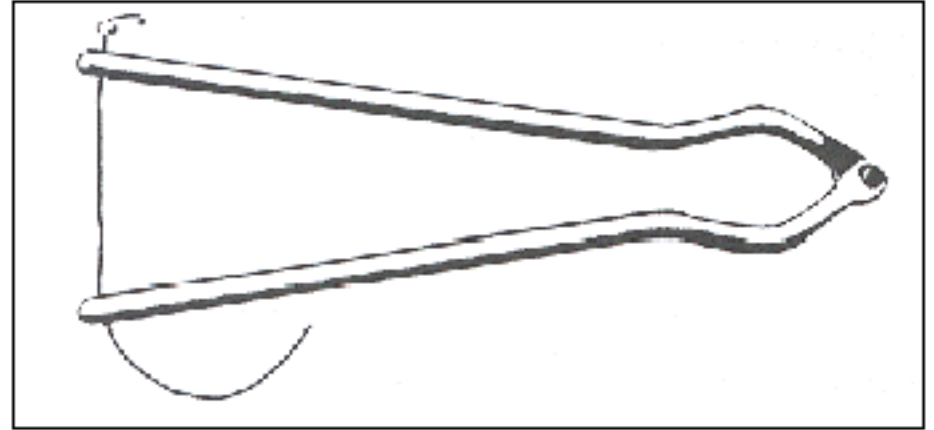
10. The islands where this breed originated are off the north coast of what country?





11. Identify part labeled
A

12. Identify part labeled
B



13. What tool is pictured on the left?

14. What tool is pictured on the right?



One horse has a body condition of four and the other has a body condition of seven.

15. What is the body condition score for the horse on the left?

16. What is the body condition score for the horse on the right?

17. What equine sport is shown in the top picture?

18. What is the breed shown in the lower picture?



© 1997 Oklahoma State University

Provided by Rick and Priscilla Hawkyard



© Photo by Cathie Peterson



19. What conformation flaw is depicted in the top picture?

20. What conformation flaw is depicted in the picture below?

